

Brilliant Public School , Sitamarhi



Class II

S.St. Worksheets

Session : 2012-13

Rajopatti,Dumra Road,Sitamarhi(Bihar),Pin-843301

Ph.06226-252314,Mobile:9431636758

BRILLIANT PUBLIC SCHOOL, SITAMARHI
Class II – SOCIAL SCIENCE – WORKSHEET

I:-FILL IN THE BLANKS:

- 1- _____ is an example of man-made fibre.
- 2- _____ clothes keep us warm in winter.
- 3-We get wool from_____.
- 4-_____ clothes keep us cool in summer.
- 5-Policemen and school children wear a special dress called_____.
- 6-Grains, pulses, milk and eggs are_____ foods.
- 7-Rice, potatoes, butter and sugar are _____ foods.
- 8-We should drink at least _____glasses of water everyday.
- 9-Foods that give us good health are called _____ foods.
- 10-Eating too much is called _____.
- 11-Air has _____.
- 12-All _____ need air to breathe.
- 13-Air occupies_____.
- 14-_____ need air to prepare food.
- 15-Cut your _____ once a week.
- 16-_____ your teeth twice a day.
- 17-Take a _____ every day.
- 18-Clean your _____ with a clean handkerchief.
- 19-Do _____ daily.
- 20-Always drink clean _____.
- 21-Wash your _____ before and after meals.
- 22-Comb your _____ properly.
- 23-Wash _____ and _____ before eating.
- 24-The way someone holds his/her body is called_____.
- 25-_____ refreshes our body and mind.
- 26-We must eat _____ meals everyday.
- 27-Our _____ should not be bent forward when we sit.
- 28-Our food must include green _____ and fruits.
- 29-An _____ is a house made up of snow and ice.
- 30-A _____ is a boat with rooms in it.
- 31-_____ houses are mostly found in villages.
- 32-_____ houses are made up of bricks, cement and iron.

II:-NAME THE FOLLOWING:

- 1-Three main food groups
 - a) _____
 - b) _____
 - c) _____

BRILLIANT PUBLIC SCHOOL, SITAMARHI
Class II – SOCIAL SCIENCE – WORKSHEET

I. ANSWER THE FOLLOWING QUESTIONS:

Q1. You want to buy fruits and toys. Where will you go?

Q2. You have a written letter to your friend. Where will you post it?

Q3. You are sick and need help. Where will you go?

Q4. You want to keep your money and some valuable things safe. Where will you keep them?

Q5. Why do people work?

Q6. What is an occupation?

Q7. Who repairs our vehicles?

Q8. What does a grocer sell?

BRILLIANT PUBLIC SCHOOL, SITAMARHI
Class II – SOCIAL SCIENCE – WORKSHEET

Q9. What does a clown do?

Q10. Where does the sun rise?

Q11. Where does the sun set?

Q12. What is direction?

Q13. Name four neighbourhood places that provide us with important services.

1. _____
2. _____
3. _____
4. _____

Q14. Name any three things that you can buy from a post office.

1. _____
2. _____

BRILLIANT PUBLIC SCHOOL, SITAMARHI
Class II – SOCIAL SCIENCE – WORKSHEET

3. _____

Q15. Name the four main directions.

1. _____

2. _____

3. _____

4. _____

II. FILL IN THE BLANKS

1. We call the _____ if there is a fire in the neighbourhood.
2. A _____ sells medicines.
3. A _____ controls the traffic on the road.
4. We dial _____ to call an ambulance.
5. A _____ stitches clothes for us.
6. A _____ makes furniture for us.
7. A _____ repairs things made of iron.
8. A _____ grows crops for us.
9. A _____ makes pots on a potter's wheel.
10. We dial _____ to call the fire engine.

III. WRITE TRUE OR FALSE

1. A doctor treats the sick people. _____
2. Banks keep our money and jewellery safe. _____
3. People do same kinds of work. _____
4. A policeman treats the sick people. _____
5. A farmer grows crops. _____
6. A plumber repairs vehicles. _____




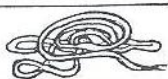











BRILLIANT PUBLIC SCHOOL, SITAMARHI
Class II – SOCIAL SCIENCE – WORKSHEET

7. A carpenter makes pots on a potter's wheel. _____
8. There are different kinds of professions. _____
9. There are four main directions. _____
10. The sun rises in the east. _____

IV. UNDERLINE THE CORRECT ANSWER.


1. We dial (101/102) to call an ambulance.
2. A (policeman/fireman) puts out fire.
3. A (nurse/doctor) treats sick people.
4. We dial (101/100) to call police.
5. A (clown/singer) makes us laugh in the circus.
6. A (tailor/carpenter) makes furniture for us.
7. A (cobbler/mechanic) repairs shoes.
8. A (painter/clown) entertains us.
9. A (plumber/mechanic) repairs our vehicles.
10. The sun rises in the (east/west).

V. CROSS (X) OUT THE THING WHICH DOES NOT BELONG TO THE PERSON GIVEN BELOW:

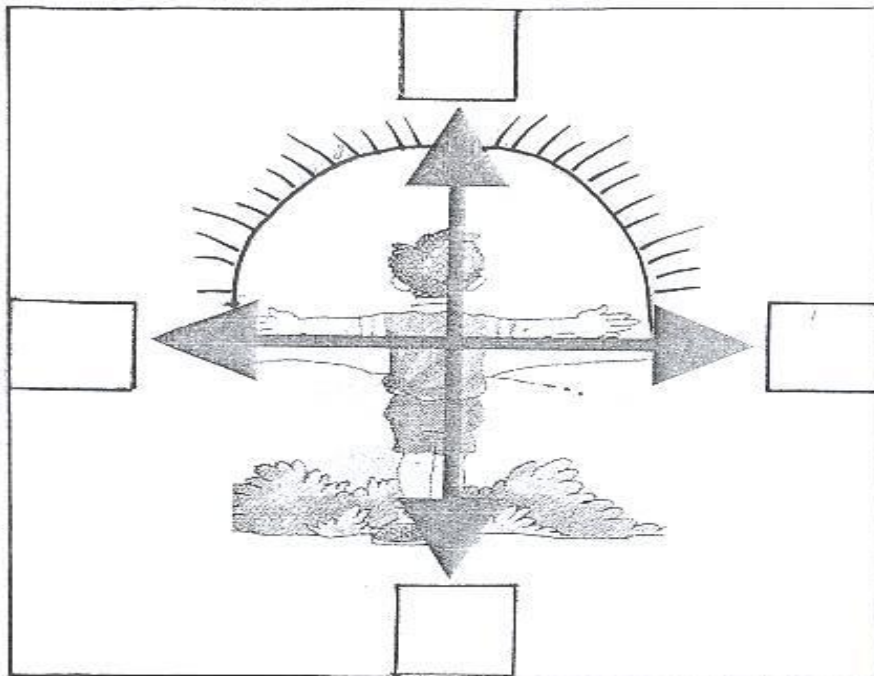
Painter			
Electrician			
Plumber			
Mason			
Carpenter			

BRILLIANT PUBLIC SCHOOL, SITAMARHI
Class II – SOCIAL SCIENCE – WORKSHEET

VI. NAME THE FOLLOWING:



VII. MARK THE DIRECTIONS ACCORDING TO THE PICTURE.



VIII. DRAW AND COLOUR A POST BOX

BRILLIANT PUBLIC SCHOOL, SITAMARHI
Class II – SOCIAL SCIENCE – WORKSHEET

I. Fill in the blanks :

1. The road must be crossed at the _____ crossing.
2. We must always walk on the _____.
3. Children should never _____ on the road.
4. People should stand in a _____ on the bus stop.
5. We must not run up or down the _____.
6. _____ is the fastest means of transport.
7. _____ are the means of water transport.
8. _____ is the means of land transport.
9. We wear raincoat in the _____ season.
10. Trees shed their leaves in the _____ season.
11. The shortest day of the year is _____.
12. The _____ season comes just before summer.
13. We feel cold in the _____ season.
14. Big seas are called _____.
15. The earth is made up of _____ and water.
16. Man has made many _____ on Earth.
17. _____ break down into sand and soil.
18. We should make an effort to _____ our Earth.

II. Write true or false:

1. Cross the road only when the pedestrian light is green. _____
2. We should stand on the footboard while travelling in a bus. _____
3. We should follow safety rules to avoid accidents. _____
4. We should lean out of the window of a moving bus. _____
5. Never try to get in to the moving bus. _____
6. We should obey traffic lights and road signs while driving. _____
7. On land we can travel on roads or rails. _____
8. We can travel long distances comfortably by a scooter. _____
9. Aeroplane is a fast means of transport. _____
10. Steamer is a mean of water transport. _____
11. The aeroplane was invented by two brothers named Wilbur and Orville brothers. _____

BRILLIANT PUBLIC SCHOOL, SITAMARHI
Class II – SOCIAL SCIENCE – WORKSHEET

12. A train runs on electricity or diesel. _____
13. We use room heater during summer season. _____
14. We wear woolen clothes during winter season. _____
15. Rainy season is also known as monsoon. _____
16. The autumn season comes just before summer. _____
17. When it rains we use an umbrella and raincoat. _____
18. Wood from plants are used as a fuel. _____
19. We get oil by crushing the flowers of some plants. _____
20. Penicillin is a medicine. _____
21. We get latex from the willow tree. _____
22. Plants make the air fresh. _____
23. Jute is a fibre. _____
24. Spices impart taste and smell to our food. _____
25. Meat of sheep and goat is called mutton. _____
26. The oxen carry loads for us. _____
27. We get honey and wax from bees. _____
28. Wax is used for making shoes and belts. _____
29. Bees collect nectar from flowers and turn into honey. _____
30. Silk is made from a thread made by the bees. _____
31. We get leather from buffaloes and cows. _____
32. The donkey carries loads for us. _____
33. Land forms and water bodies are natural features. _____
34. A stream is a big water body. _____
35. Land forms and water bodies are man-made. _____
36. Earth is the only one place where life exists. _____
37. Big seas are called lakes. _____
38. Forests are our real wealth. _____

III. Underline the correct word:

1. We should play in the (park/road).
2. We should not play with (toys/ matchbox).
3. We should not touch electric switches or wires with (wet/ dry) hands.

BRILLIANT PUBLIC SCHOOL, SITAMARHI
Class II – SOCIAL SCIENCE – WORKSHEET

4. We can reach far off places in a short while by (air / land).
5. (Cycle cart/ bullock cart) is run by man power.
6. (Train/ ship) is a means of land transport.
7. A (bicycle/ car) has two wheels.
8. (Tonga/car) is a means of transport run by animals.
9. 21 December is the (shortest/longest) day of the year.
10. During (spring/winter) season, it is neither hot nor cold.
11. The longest day of the year is (23 June/ 21 December).
12. (Weather/Season) is the condition of the air that surrounds the Earth.
13. Most trees shed their leaves during (autumn/spring) season.
14. We wear cotton clothes during (summer/winter) season.
15. Quinine is a (perfume/medicine).
16. Plants give out (oxygen/carbon dioxide).
17. Cloves are (fibre/spices).
18. (Tulsi leaves/rose leaves) are used for cough and cold.
19. Groundnut is used for making (perfume/ oil).
20. Rubber is used for making (tyres/medicine).
21. We make perfumes from (seeds/flowers).
22. (Bees/silk worm) collect nectar from flowers.
23. Cheese and sweets made from (honey/milk).
24. We get wool from (donkey/sheep).
25. Belt and purse made from (leather/ wax).
26. The (donkey/oxen) plough the fields.
27. (Silk/leather) is used for making muffler and scarf.
28. Earth is (round in shape/flat in shape).
29. Big seas are called (streams/ocean).
30. Our real wealth is (forest/desert).
31. Plateau, mountains, hills and valleys are (landforms/water bodies).

IV. Give two examples of each of the following:

1. Slow means of transport run by man power.
a. _____ b. _____
2. Land transport having two wheels.

BRILLIANT PUBLIC SCHOOL, SITAMARHI
Class II – SOCIAL SCIENCE – WORKSHEET

a. _____ b. _____

3. Slow means of transport run by animals.

a. _____ b. _____

4. Land transport having four wheels.

a. _____ b. _____

5. Means of air transport.

a. _____ b. _____

6. Plants whose roots we eat.

a. _____ b. _____

7. Plants whose leaves we eat.

a. _____ b. _____

8. Plants whose seeds we eat.

a. _____ b. _____

9. Plants that give us fibre

a. _____ b. _____

10. Plants that give us perfumes

a. _____ b. _____

V. Answer the following:

1. Why should we follow the safety rules?

Ans. _____

—

2. What are road signs?

Ans. _____

—

—

—

BRILLIANT PUBLIC SCHOOL, SITAMARHI
Class II – SOCIAL SCIENCE – WORKSHEET

3. Where should children play?

Ans. _____

—

—

4. What should never be touched with wet hands?

Ans. _____

—

—

5. What is weather?

Ans. _____

—

—

6. What is a season?

Ans. _____

7. Which is your favourite season?

Ans. _____

—

—

8. Name the three seasons.

Ans. _____

—

—

9. How do we get oil?

Ans. _____

—

BRILLIANT PUBLIC SCHOOL, SITAMARHI
Class II – SOCIAL SCIENCE – WORKSHEET

—
10. What is latex?

Ans. _____

—

—

11. How do we get honey?

Ans. _____

—

—

12. How is wax useful?

Ans. _____

—

—

13. Where do we get leather from?

Ans. _____

—

—

14. What kind of animals are called beasts of burden?

Ans. _____

15. Name three things made with milk.

Ans. _____

16. What is the shape of the Earth like?

BRILLIANT PUBLIC SCHOOL, SITAMARHI
Class II – SOCIAL SCIENCE – WORKSHEET

Ans. _____

17. How much of the Earth is covered with water?

Ans. _____

18. Why is the Earth called the Blue Planet?

Ans. _____

19. Name two landforms found on the Earth.

Ans. _____

VI. Write what these symbols stand for:

1.



This means _____

2.



This means _____

3.



This means _____

4.



This means that there is a _____ ahead.

5.



This means _____

BRILLIANT PUBLIC SCHOOL, SITAMARHI
Class II – SOCIAL SCIENCE – WORKSHEET

6.




This means _____.

VII. Match the following:

<p>Road Signs Do not play Stand in a queue Walk Cross the road Never lean out of the Never go alone Never stand</p>	<p>with sharp things at the bus stop on the foot path to control traffic and avoid accidents window of the bus for a swim on the foot board of a bus at the zebra crossing</p>
<p>Cardamom Latex Cricket Cotton Fuel Honey Leather Nectar</p>	<p>rubber tree willow tree fibre spice bees animals flowers wood of plants</p>
<p>Eggs Mutton Candle River Man made Valleys and hills Forest Earth</p>	<p>meat of Goat and Sheep wax water body hen and duck land forms real wealth round in shape canals and dams</p>

BRILLIANT PUBLIC SCHOOL, SITAMARHI
Class II – SOCIAL SCIENCE – WORKSHEET

VIII) Fill in the blanks to complete the names of these landforms.



IX. Draw and colour :

A sail boat

A traffic signal