

BRILLIANT PUBLIC SCHOOL , SITAMARHI

(Affiliated up to +2 level to C.B.S.E., New Delhi)
Affiliation No. - 330419



Class-II S.A.- I & II Maths
Chapterwise Printable Worksheets

Session : 2014-15

Office: Rajopatti, Dumra Road, Sitamarhi(Bihar), Pin-843301
Website: www.brilliantpublicschool.com; E-mail: brilliantpublic@yahoo.com
Ph.06226-252314, Mobile: 9431636758, 9931610902

BRILLIANT PUBLIC SCHOOL, SITAMARHI
Class II – MATHS – WORKSHEET

I Write the Number Names

223 - _____
89 - _____
605 - _____
1000 - _____
812 - _____
437 - _____
893 - _____
910 - _____
115 - _____
844 - _____

II Fill in the blanks

6 X 7	=	_____	2 X 9	=	_____
7 X 8	=	_____	7 X 5	=	_____
3 X 10	=	_____	6 X 7	=	_____
5 X 5	=	_____	3 X 6	=	_____
6 X 3	=	_____	7 X 7	=	_____
3 X 9	=	_____	5 X 8	=	_____

III Write the Numeral

Six hundred seventy _____
One thousand _____
Two hundred ten _____
Nine hundred fourteen _____
Eight hundred ninety two _____

BRILLIANT PUBLIC SCHOOL, SITAMARHI
Class II – MATHS – WORKSHEET

IV Fill in the blanks

879	_____	_____	882	_____	_____
436	_____	_____	439	_____	_____
76	_____	_____	79	_____	_____
42	_____	_____	45	_____	_____
994	_____	_____	997	_____	_____
82	_____	_____	79	_____	_____
46	_____	_____	43	_____	_____
93	_____	_____	90	_____	_____

V What comes before

_____	70
_____	46
_____	81
_____	89
_____	10

VI What comes after

25	_____
98	_____
60	_____
49	_____
72	_____

VII What comes in between

39	_____	41
90	_____	92
12	_____	14
49	_____	51
35	_____	37

BRILLIANT PUBLIC SCHOOL, SITAMARHI
Class II – MATHS – WORKSHEET

VIII Write the place value of

5 in 75 _____

4 in 46 _____

1 in 105 _____

0 in 809 _____

7 in 927 _____

2 in 620 _____

IX Write the place value of digit underlined

45 _____

654 _____

930 _____

605 _____

X Write the expanded form

$$94 = \text{ ____ tens } + \text{ ____ Ones } = \text{ ______ } + \text{ ______ }$$

$$70 = \text{ ____ tens } + \text{ ____ Ones } = \text{ ______ } + \text{ ______ }$$

$$356 = \text{ ___ hundred } + \text{ ___ tens } + \text{ ___ ones } = \text{ ___ } + \text{ ___ } + \text{ ___ }$$

$$804 = \text{ ___ hundred } + \text{ ___ tens } + \text{ ___ ones } = \text{ ___ } + \text{ ___ } + \text{ ___ }$$

XI Write the expanded form

$$345 = \text{ ______ } + \text{ ______ } + \text{ ______ }$$

$$206 = \text{ ______ } + \text{ ______ } + \text{ ______ }$$

$$580 = \text{ ______ } + \text{ ______ } + \text{ ______ }$$

BRILLIANT PUBLIC SCHOOL, SITAMARHI
Class II – MATHS – WORKSHEET

XII Fill in the blanks

5 tens + 3 ones = _____

5 hundreds + 0 ten + 3 ones = _____

9 hundreds + 5 tens + 2 ones = _____

200 + 30 + 2 = _____

600 + 40 + 5 = _____

300 + 30 = _____

100 + 50 = _____

20 + 9 = _____

XIII Encircle the greatest number

65 94 29

49 41 45

723 903 693

893 938 983

13 131 113

XIV Encircle the smallest number

83 80 89

91 19 90

723 864 946

825 523 532

620 565 490

XV Put <, > or = sign

923

729

980

908

500

500

321

123

28

48

582

528

BRILLIANT PUBLIC SCHOOL, SITAMARHI
Class II – MATHS – WORKSHEET

XVI Write in Ascending order

1 43 28 97 39

2 67 69 60 64

3 986 168 786 689

4 876 892 805 867

5 545 594 972 391

XVII Write in Descending order

1 43 9 97 68

2 199 692 965 856

3 658 895 859 910

4 24 90 89 56

BRILLIANT PUBLIC SCHOOL, SITAMARHI

Class II – MATHS – WORKSHEET

XVIII Tick the correct answer

Number	Even	Odd
20		
13		
6		
15		
23		

XIX Write the next four odd/even numbers

1 7 9 ____ , ____ , ____ , ____

2 13 15 ____ , ____ , ____ , ____

3 10 12 ____ , ____ , ____ , ____

4 6 8 ____ , ____ , ____ , ____

5 14 16 ____ , ____ , ____ , ____

XX Find the sum

24	56	40
+ 62	+ 43	+ 58

21	53	40
42	25	26
+ 34	+ 10	+ 22

BRILLIANT PUBLIC SCHOOL, SITAMARHI
Class II – MATHS – WORKSHEET

236	405	410
+ 522	+ 373	+ 480

XXI Write these numbers in columns and add

40 , 46

52 , 45

52 ,13, 23

50 , 25 , 14

XXII Add the following

65	78	34
+ 25	+ 26	+ 47

525	699	352
+ 225	+ 938	+ 175

226	383	343
+ 336	+ 248	+ 782

BRILLIANT PUBLIC SCHOOL, SITAMARHI
Class II – MATHS – WORKSHEET

XXIII Add the following

326 and 48

638 and 26

765 and 28

XXIV Fill in the blanks

- 1 10 tens = 1 _____
- 2 _____ is the smallest 3 digit number
- 3 _____ is the smallest 4 digit number
- 4 _____ is the largest 3 digit number
- 5 Numbers that have 0 , 2, 4,6 and 8 at ones place are called _____
- 6 Numbers that have 1 , 3, 5,7 and 9 at ones place are called _____
- 7 Odd numbers are those numbers that _____ be put in pairs.
- 8 Even numbers are those numbers that can be put in _____.
- 9 After every odd number there is an _____ number
- 10 The number that we get by adding two numbers is called the _____.
- 11 Any number + zero = _____
- 12 Any number + 1 = _____

BRILLIANT PUBLIC SCHOOL, SITAMARHI
Class II – MATHS – WORKSHEET

XXV Match the following

$30+4$	6
2×9	34
$2+3+1$	18
$50+0$	49
$600+20+5$	50
7×7	625

XXVI Write True or False

$9 + 7 = 15$	_____
$5 + 3 = 3 + 5$	_____
$20 + 0 = 20$	_____
$89 + 1 = 91$	_____

XXVI Choose the correct answer

- _____ is the smallest 3 digit number
(999 , 100 , 1000)
- The number that we get by adding two numbers
(sum , product , difference)
- The smallest even number (0 , 1 , 2)
- The numbers that can be put in pairs (odd , even)

BRILLIANT PUBLIC SCHOOL, SITAMARHI

Class II – MATHS – WORKSHEET

I Subtract :

$$9 - 5 = \underline{\hspace{2cm}}$$

$$4 - 3 = \underline{\hspace{2cm}}$$

$$7 - 0 = \underline{\hspace{2cm}}$$

$$80 - 70 = \underline{\hspace{2cm}}$$

$$50 - 50 = \underline{\hspace{2cm}}$$

$$16 - 10 = \underline{\hspace{2cm}}$$

II Find the difference:

6	8	7	85	79	59
- 3	- 5	- 7	- 4	- 40	- 36
-----	-----	-----	-----	-----	-----
=====	=====	=====	=====	=====	=====
82	70	41	55	76	
- 16	- 35	- 28	- 46	- 36	
-----	-----	-----	-----	-----	
=====	=====	=====	=====	=====	

88	548	789	607	792
- 29	- 324	- 507	- 502	- 375
-----	-----	-----	-----	-----
=====	=====	=====	=====	=====

845	666	904	420	843
- 152	- 278	- 341	- 318	- 565
-----	-----	-----	-----	-----
=====	=====	=====	=====	=====

III Arrange in column and subtract

1. Subtract 63 from 95

2. Subtract 18 from 81

3. Subtract 92 from 186




BRILLIANT PUBLIC SCHOOL, SITAMARHI

Class II – MATHS – WORKSHEET

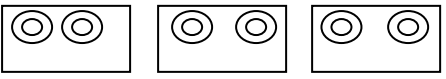
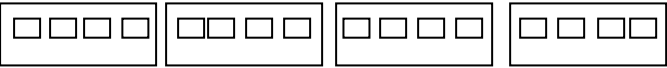

IV Fill in the blanks

- a. $6 \times 5 =$ _____ f. $3 \times 3 =$ _____
- b. $7 \times 2 =$ _____ g. $4 \times 7 =$ _____
- c. $9 \times 0 =$ _____ h. $5 \times 9 =$ _____
- d. $8 \times 9 =$ _____ i. $1 \times 8 =$ _____
- e. $2 \times 8 =$ _____ j. $10 \times 10 =$ _____

V Look at the picture and write as repeated addition :

1.  = $5 + 5$ _____
2.  = _____
3.  = _____

VI Look at the picture and write the multiplication fact :

1.  = $3 \times 2 = 6$ _____
2.  = _____ = _____
3.  = _____ = _____

VII Write the multiplication fact for the following:

- $6 + 6 + 6 + 6 + 6 = 5 \times 6 = 30$ _____
- $3 + 3 + 3 =$ _____ = _____
- $8 + 8 =$ _____ = _____
- $2 + 2 + 2 + 2 =$ _____ = _____
- $7 + 7 + 7 + 7 + 7 + 7 =$ _____ = _____

BRILLIANT PUBLIC SCHOOL, SITAMARHI

Class II – MATHS – WORKSHEET

VIII Find the product:

4	8	5	33	41	63
x 4	x 3	x 7	x 2	x 5	x 3
_____	_____	_____	_____	_____	_____
=====	=====	=====	=====	=====	=====

422	605	712	65	89	57	34
x 2	x 1	x 4	x 5	x 2	x 7	x 9
_____	_____	_____	_____	_____	_____	_____
=====	=====	=====	=====	=====	=====	=====

70	11	28
x 6	x 8	x 8
_____	_____	_____
=====	=====	=====

IX Fill in the blanks :

1. The sign for multiplication is _____
2. The sign for subtraction is _____
3. The answer in subtraction is called _____
4. The answer in multiplication is called _____
5. Any number $- 0 =$ _____
6. $49 - 0 =$ _____
7. $65 - 0 =$ _____
8. $8 - 0 =$ _____
9. If we subtract a number from the same number we get _____
10. $41 - 41 =$ _____
11. $9 - 9 =$ _____
12. $83 - 83 =$ _____
13. When we add the same number over and over again it is called _____ addition.
14. Zero multiplied by any number gives _____ as answer.
15. One multiplied by any number gives the _____ as answer.

BRILLIANT PUBLIC SCHOOL, SITAMARHI
Class II – MATHS – WORKSHEET

X Match the following

$8 - 8$

5×2

6×6

$50 - 20$

$35 - 0$

4×8

10

0

30

36

32

35

XI Choose the correct answer

1. Any number $- 0 =$ _____
(next number / same number)

2. The sign for multiplication is _____
(\times / $+$)

3. $15 - 5 =$ _____
(15, 5, 10)

4. $7 \times 8 =$ _____
(54, 65, 56)

5. $30 - 30 =$ _____
(10, 20, 0)

BRILLIANT PUBLIC SCHOOL, SITAMARHI

Class II – MATHS – WORKSHEET

I. Divide the following:

$10 \div 2 =$		$4 \div 2 =$		$8 \div 4 =$	
$36 \div 6 =$		$6 \div 2 =$		$5 \div 5 =$	
$9 \div 3 =$		$7 \div 1 =$		$24 \div 6 =$	
$30 \div 5 =$		$56 \div 8 =$		$100 \div 10 =$	
$8 \div 2 =$		$18 \div 3 =$		$30 \div 10 =$	
$21 \div 7 =$		$40 \div 8 =$		$32 \div 4 =$	
$81 \div 9 =$		$9 \div 9 =$		$60 \div 6 =$	

II. Complete the division sentence for the following:

1. Encircle groups of 2.

○ ○ ○ ○
○ ○ ○ ○

$\div 2 =$

○ ○ ○ ○
○ ○ ○ ○

○ ○ ○ ○

$\div 2 =$

2. Encircle groups of 5

○ ○ ○ ○ ○
○ ○ ○ ○ ○

$\div 5 =$

○ ○ ○
○ ○ ○
○ ○ ○
○ ○ ○
○ ○ ○

\div

3. Encircle groups of 6

○ ○ ○ ○ ○ ○
○ ○ ○ ○ ○ ○

○ ○ ○
○ ○ ○

$\div 6 =$

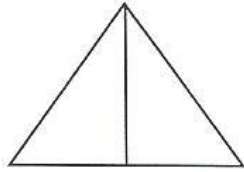
\div

BRILLIANT PUBLIC SCHOOL, SITAMARHI
Class II – MATHS – WORKSHEET

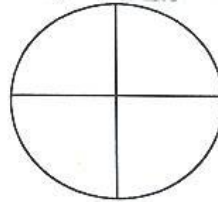
III. Fractions

Shade the following :


$$\frac{1}{2}$$




$$\frac{3}{4}$$



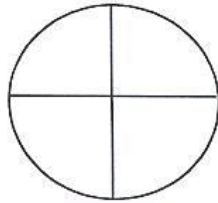
$$\frac{1}{3}$$



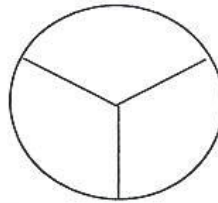
$$\frac{1}{2}$$




$$\frac{1}{4}$$




$$\frac{1}{3}$$



$$\frac{2}{3}$$



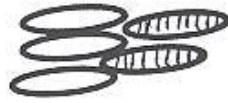
$$\frac{3}{4}$$



BRILLIANT PUBLIC SCHOOL, SITAMARHI
Class II – MATHS – WORKSHEET

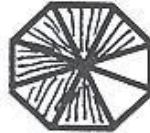
Write the fraction for shaded part









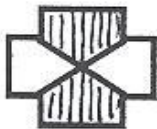





















BRILLIANT PUBLIC SCHOOL, SITAMARHI

Class II – MATHS – WORKSHEET

IV Money

A. Write the amount in words:

₹ 76.50 _____

₹ 653 _____

₹ 1000 _____

₹ 550.75 _____

₹ 202.20 _____

₹ 15.50 _____

₹ 4.25 _____

B. Write the amount in figures:

1. Six hundred twenty five rupees –
2. One hundred rupees and fifty paise –
3. Seventy five rupees seventy five paise –
4. Five hundred fifty three rupees and twenty five paise –
5. Seven hundred ten rupees and fifty paise –
6. Two hundred thirteen rupees and twenty paise –
7. Three rupees and twenty paise –

C. Fill in the blanks:

1. $20p + 20p + 10p =$
2. $50p + 25p + 25p =$
3. $10p + 10p + 5p =$
4. $50p + 25p + 10p =$
5. $25p + 5p + 5p =$

D. Addition of rupees and paise:

₹	P	₹	P	₹	P
56	20	29	35	25	15
+23	40	+14	25	+13	15
_____		_____		_____	
_____		_____		_____	

₹	P	₹	P	₹	P
25	25	14	80	50	10
+25	26	+24	65	+25	20
_____		_____		_____	
_____		_____		_____	

BRILLIANT PUBLIC SCHOOL, SITAMARHI

Class II – MATHS – WORKSHEET

E. Subtract the following:

`	P	`	P	`	P
50	40	90	40	89	55
-20	10	-14	20	-25	65
`	P	`	P	`	P
99	50	70	25	50	75
-22	25	-65	15	-25	35

F. Word problems on addition of money: Pgs 129,130

1. Rohan had ` 50. His father gave him ` 50 more. How much money does he have now?
Ans: _____
2. I had ` 600. I got ` 275 from the grocer. How much money do I have now?
Ans: _____
3. Two friends went to an ice-cream shop. They wanted to buy chocobar worth ` 52 each. How much money do they need in all?
Ans: _____
4. Seema bought a doll for ` 250 and a toy for ` 79. How much money did she spend in all?
Ans: _____

IV. Shapes.

A. Fill in the blanks:

Flat Shapes		Faces	Sides	Corners
1	Square			
2	Rectangle			
3	Triangle			
4	Circle			
5	Oval			

B. Fill in the blanks:




Solid Shapes		Faces	Sides	Corners
1	Cube			
2	Cuboid			
3	Cone			
4	Sphere			
5	Cylinder			

BRILLIANT PUBLIC SCHOOL, SITAMARHI
Class II – MATHS – WORKSHEET

C. Give two examples of the following shapes:

1. Cube:- _____
2. Cuboid:- _____
3. Cone:- _____
4. Sphere:- _____
5. Cylinder:- _____

D. Match the following:

$\` 8.50$	One thousand rupees
$\` 1000$	Eight rupees and fifty paise
$\` 24.75$	
Cuboid	Twenty four rupees and seventy five paise
Spherical	28 days
Conical	366 days
February	5
Leap year	
$25 \div 2$	

E. Choose the correct answer:

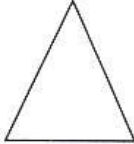


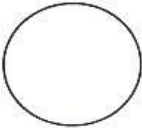
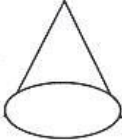
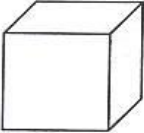
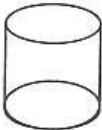

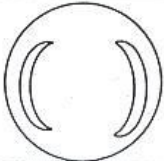
1. There are _____ days in a week. (8, 7, 9, 12)
2. 8th month of the year. (August, September, October, July)
3. _____ come after July. (May, June, August, April)
4. A dice looks like a _____. (Cone, Sphere, Cube, Cuboid)
5. _____ is a solid figure. (Cylinder, Square, Triangle, Oval)

Note: any days and months can be asked.

BRILLIANT PUBLIC SCHOOL, SITAMARHI
Class II – MATHS – WORKSHEET

F.











Match the following shapes :-

- | | | |
|----|---|------------------|
| 1. |  | Cone |
| 2. |  | Triangle |
| 3. |  | Square |
| 4. |  | Rectangle |
| 5. |  | Cube |
| 6. |  | Cylinder |
| 7. |  | Cuboid |
| 8. |  | Sphere |
| 9. |  | Circle |

BRILLIANT PUBLIC SCHOOL, SITAMARHI
Class II – MATHS – WORKSHEET

G.

Name the Following Shapes

				
_____	_____	_____	_____	_____
				
_____	_____	_____	_____	_____

BRILLIANT PUBLIC SCHOOL, SITAMARHI
Class II – MATHS – WORKSHEET

V. Time:

1. Face of the clock is called the _____.
2. The longer hand of the clock is called the _____ hand.
3. The shorter hand of the clock is called the _____ hand.
4. The minute hand takes _____ minutes to move from one number to the next number.
5. The hour hand takes _____ hour to move from one number to the next.
6. 1 hour = _____ minutes.
7. There are _____ months in a year.
8. There are _____ weeks in a year.
9. There are _____ days in a year.
10. A _____ year has 366 days.
11. A leap year comes once in every _____ years.
12. In a leap year February has _____ days.
13. The symbol for Indian rupee is _____.
14. The money we use comes in the form of _____ and _____.
15. Coins are made of _____.
16. Notes are made of _____.
17. 1 Rupee = _____ paise or 100 paise = _____ Rupee.
18. _____ is one of the equal parts of a whole.
19. $\frac{1}{4}$ is also called a _____.
20. $\frac{1}{2} + \frac{1}{2} =$ _____.
21. $\frac{1}{4} + \frac{1}{4} =$ _____.
22. $\frac{1}{4} + \frac{1}{4} + \frac{1}{4} + \frac{1}{4} =$ _____.
23. $\frac{1}{2} +$ _____ = 1.
24. $\frac{1}{4} +$ _____ = $\frac{1}{2}$.
25. Which is the first day of the week? _____
26. Which day comes between Thursday and Saturday? _____
27. Which day comes after Sunday? _____
28. Which day comes before Friday? _____
29. Which is the first month of the year? _____
30. Which is the last month of the year? _____
31. Which month comes after June? _____
32. Which month comes before May? _____
33. Name the days of the week.

BRILLIANT PUBLIC SCHOOL, SITAMARHI
Class II – MATHS – WORKSHEET

VI.

Look at the clock and write the correct time

